

10 Times Table Activities

Count in 10s and colour in the grid:

1	2	3	4	5	6	7	8	9	10
11	12	13	14	15	16	17	18	19	20
21	22	23	24	25	26	27	28	29	30
31	32	33	34	35	36	37	38	39	40
41	42	43	44	45	46	47	48	49	50
51	52	53	54	55	56	57	58	59	60
61	62	63	64	65	66	67	68	69	70
71	72	73	74	75	76	77	78	79	80
81	82	83	84	85	86	87	88	89	90
91	92	93	94	95	96	97	98	99	100
101	102	103	104	105	106	107	108	109	110
111	112	113	114	115	116	117	118	119	120
121	122	123	124	125	126	127	128	129	130

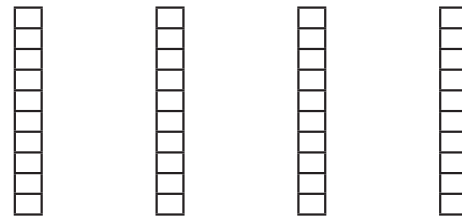
Work out these answers:

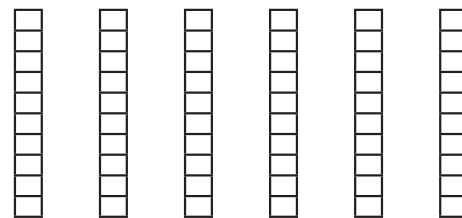
a) $2 \times 10 =$ _____ d) $6 \times 10 =$ _____

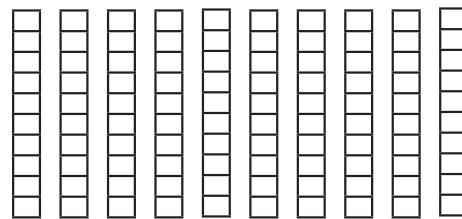
b) $10 \times 10 =$ _____ e) $12 \times 10 =$ _____

c) $5 \times 10 =$ _____ f) $9 \times 10 =$ _____

How many cubes are there? There are 10 cubes per stack.

a)  _____ \times _____ = _____

b)  _____ \times _____ = _____

c)  _____ \times _____ = _____